

To simplify an  $n$ th root, identify factors in the radicand with exponents that are multiples of  $n$ .

### MULTIPLYING AND SIMPLIFYING

We have used the product rule for radicals to find products and also to simplify radical expressions. For some radical expressions, it is possible to do both: First find a product and then simplify.

**EXAMPLE 5** Multiply and simplify.

a)  $\sqrt{15} \sqrt{6}$

b)  $3\sqrt[3]{25} \cdot 2\sqrt[3]{5}$

c)  $\sqrt[4]{8x^3y^5} \sqrt[4]{4x^2y^3}$

**SOLUTION**

$$\begin{aligned} \text{a) } \sqrt{15}\sqrt{6} &= \sqrt{15 \cdot 6} \\ &= \sqrt{90} = \sqrt{9 \cdot 10} \\ &= 3\sqrt{10} \end{aligned}$$

**Multiplying radicands**  
9 is a perfect square.

$$\begin{aligned} \text{b) } 3\sqrt[3]{25} \cdot 2\sqrt[3]{5} &= 3 \cdot 2 \cdot \sqrt[3]{25 \cdot 5} \\ &= 6 \cdot \sqrt[3]{125} \\ &= 6 \cdot 5, \text{ or } 30 \end{aligned}$$

**Using a commutative law;**  
**multiplying radicands**  
125 is a perfect cube.

$$\begin{aligned} \text{c) } \sqrt[4]{8x^3y^5} \sqrt[4]{4x^2y^3} &= \sqrt[4]{32x^5y^8} \\ &= \sqrt[4]{16x^4y^8} \cdot 2x \\ &= \sqrt[4]{16x^4y^8} \sqrt[4]{2x} \\ &= 2xy^2 \sqrt[4]{2x} \end{aligned}$$

**Multiplying radicands**  
**Identifying the largest perfect**  
**fourth-power factor**  
**Factoring into radicals**  
**Finding the fourth roots;**  
assume  $x \geq 0$ .

The checks are left to the student.

Try Exercise 65.

#### Teaching Tip

Consider doing an example like  $\sqrt{2x^8} \sqrt{9x^3}$  in two ways. First, simplify and multiply. Next, multiply first and then simplify. This can be the basis for discussing the best way to do these problems.

#### Student Notes

To multiply  $\sqrt{x} \cdot \sqrt{x}$ , remember what  $\sqrt{x}$  represents and go directly to the product,  $x$ . For  $x \geq 0$ ,

$$\begin{aligned} \sqrt{x} \cdot \sqrt{x} &= x, \\ (\sqrt{x})^2 &= x, \text{ and} \\ \sqrt{x^2} &= x. \end{aligned}$$

## 7.3

### Exercise Set

FOR EXTRA HELP



**Concept Reinforcement** Classify each of the following statements as either true or false.

1. For any real numbers  $\sqrt[n]{a}$  and  $\sqrt[n]{b}$ ,  
 $\sqrt[n]{a} \cdot \sqrt[n]{b} = \sqrt[n]{ab}$ . **True**

2. For any real numbers  $\sqrt[n]{a}$  and  $\sqrt[n]{b}$ ,  
 $\sqrt[n]{a} + \sqrt[n]{b} = \sqrt[n]{a+b}$ . **False**

3. For any real numbers  $\sqrt[n]{a}$  and  $\sqrt[m]{b}$ ,  
 $\sqrt[n]{a} \cdot \sqrt[m]{b} = \sqrt[nm]{ab}$ . **False**

4. For  $x > 0$ ,  $\sqrt{x^2 - 9} = x - 3$ . **False**

5. The expression  $\sqrt[3]{X}$  is not simplified if  $X$  contains a factor that is a perfect cube. **True**

6. It is often possible to simplify  $\sqrt{A \cdot B}$  even though  $\sqrt{A}$  and  $\sqrt{B}$  cannot be simplified. **True**

Multiply.

7.  $\sqrt{5} \sqrt{7} \sqrt{35}$

8.  $\sqrt{10} \sqrt{3} \sqrt{30}$

9.  $\sqrt[3]{3} \sqrt[3]{2} \sqrt[3]{6}$

10.  $\sqrt[3]{2} \sqrt[3]{5} \sqrt[3]{10}$

11.  $\sqrt[4]{6} \sqrt[4]{3} \sqrt[4]{18}$

12.  $\sqrt[4]{8} \sqrt[4]{9} \sqrt[4]{72}$

13.  $\sqrt{2x} \sqrt{13y} \sqrt{26xy}$  14.  $\sqrt{5a} \sqrt{6b} \sqrt{30ab}$  *Aha!* 63.  $\sqrt{18a^3} \sqrt{18a^3} 18a^3$  64.  $\sqrt{75x^7} \sqrt{75x^7} 75x^7$   
 15.  $\sqrt[5]{8y^3} \sqrt[5]{10y} \sqrt[5]{80y^4}$  16.  $\sqrt[5]{9t^2} \sqrt[5]{2t} \sqrt[5]{18t^3}$  65.  $\sqrt[3]{5a^2} \sqrt[3]{2a} a\sqrt[3]{10}$  66.  $\sqrt[3]{7x} \sqrt[3]{3x^2} x\sqrt[3]{21}$   
 17.  $\sqrt{y-b} \sqrt{y+b} \sqrt{y^2-b^2}$  18.  $\sqrt{x-a} \sqrt{x+a}$   $\square$  67.  $3\sqrt{2x^5} \cdot 4\sqrt{10x^2} 24x^3\sqrt{5x}$  68.  $3\sqrt{5a^7} 2\sqrt{15a^3}$   $\square$   
 19.  $\sqrt[3]{0.7y} \sqrt[3]{0.3y} \sqrt[3]{0.21y^2}$  20.  $\sqrt[3]{0.5x} \sqrt[3]{0.2x}$   $\square$  69.  $\sqrt[3]{s^2t^4} \sqrt[3]{s^4t^6} s^2t^3\sqrt[3]{t}$  70.  $\sqrt[3]{x^2y^4} \sqrt[3]{x^2y^6}$   
 21.  $\sqrt[5]{x-2} \sqrt[5]{(x-2)^2} \sqrt[5]{(x-2)^3}$  71.  $\sqrt[3]{(x+5)^2} \sqrt[3]{(x+5)^4} (x+5)^2$   
 22.  $\sqrt[4]{x-1} \sqrt[4]{x^2+x+1} \sqrt[4]{x^3-1}$  72.  $\sqrt[3]{(a-b)^5} \sqrt[3]{(a-b)^7} (a-b)^4$   
 23.  $\sqrt{\frac{3}{t}} \sqrt{\frac{7s}{11}} \sqrt{\frac{21s}{11t}}$  24.  $\sqrt{\frac{5x}{6}} \sqrt{\frac{11}{y}} \sqrt{\frac{55x}{6y}}$  73.  $\sqrt[4]{20a^3b^7} \sqrt[4]{4a^2b^5} 2ab^3\sqrt[4]{5a}$   
 25.  $\sqrt[7]{\frac{x-3}{4}} \sqrt[7]{\frac{5}{x+2}} \sqrt[7]{\frac{5x-15}{4x+8}}$  74.  $\sqrt[4]{9x^7y^2} \sqrt[4]{9x^2y^9} 3x^2y^2\sqrt[4]{xy^3}$   
 26.  $\sqrt[6]{\frac{a}{b-2}} \sqrt[6]{\frac{3}{b+2}} \sqrt[6]{\frac{3a}{b^2-4}}$  75.  $\sqrt[5]{x^3(y+z)^6} \sqrt[5]{x^3(y+z)^4} x(y+z)^2\sqrt[5]{x}$   
 76.  $\sqrt[5]{a^3(b-c)^4} \sqrt[5]{a^7(b-c)^4} a^2(b-c)\sqrt[5]{(b-c)^3}$

*TW* 77. Explain how you could convince a friend that  $\sqrt{x^2 - 16} \neq \sqrt{x^2} - \sqrt{16}$ .

*TW* 78. Why is it incorrect to say that, in general,  $\sqrt{x^2} = x$ ?

Simplify by factoring.

27.  $\sqrt{18} 3\sqrt{2}$  28.  $\sqrt{50} 5\sqrt{2}$   
 29.  $\sqrt{27} 3\sqrt{3}$  30.  $\sqrt{45} 3\sqrt{5}$   
 31.  $\sqrt{8x^9} 2x^4\sqrt{2x}$  32.  $\sqrt{75y^5} 5y^2\sqrt{3y}$   
 33.  $\sqrt{120} 2\sqrt{30}$  34.  $\sqrt{350} 5\sqrt{14}$   
 35.  $\sqrt{36a^4b} 6a^2\sqrt{b}$  36.  $\sqrt{175y^8} 5y^4\sqrt{7}$   
 37.  $\sqrt[3]{8x^3y^2} 2x\sqrt[3]{y^2}$  38.  $\sqrt[3]{27ab^6} 3b^2\sqrt[3]{a}$   
 39.  $\sqrt[3]{-16x^6} -2x^2\sqrt[3]{2}$  40.  $\sqrt[3]{-32a^6} -2a^2\sqrt[3]{4}$

Find a simplified form of  $f(x)$ . Assume that  $x$  can be any real number.

41.  $f(x) = \sqrt[3]{125x^5}$   $\square$  42.  $f(x) = \sqrt[3]{16x^6}$   $\square$   
 43.  $f(x) = \sqrt{49(x-3)^2}$   $\square$  44.  $f(x) = \sqrt{81(x-1)^2}$   $\square$   
 45.  $f(x) = \sqrt{5x^2 - 10x + 5}$   $f(x) = |x-1|\sqrt{5}$   
 46.  $f(x) = \sqrt{2x^2 + 8x + 8}$   $f(x) = |x+2|\sqrt{2}$

Simplify. Assume that no radicands were formed by raising negative numbers to even powers.

47.  $\sqrt{a^6b^7} a^3b^3\sqrt{b}$  48.  $\sqrt{x^6y^9} x^3y^4\sqrt{y}$   
 49.  $\sqrt[3]{x^5y^6z^{10}} xy^2z^3\sqrt[3]{x^2z}$  50.  $\sqrt[3]{a^6b^7c^{13}} a^2b^2c^4\sqrt[3]{bc}$   
 51.  $\sqrt[4]{16x^5y^{11}} 2xy^2\sqrt[4]{xy^3}$  52.  $\sqrt[5]{-32a^7b^{11}} -2ab^2\sqrt[5]{a^2b}$  *TW*  
 53.  $\sqrt[5]{x^{13}y^8z^{17}} x^2yz^3\sqrt[5]{x^3y^3z^2}$  54.  $\sqrt[5]{a^6b^8c^9} abc\sqrt[5]{ab^3c^4}$  *TW*  
 55.  $\sqrt[3]{-80a^{14}} -2a^4\sqrt[3]{10a^2}$  56.  $\sqrt[4]{810x^9} 3x^2\sqrt[4]{10x}$

Multiply and simplify. Assume that no radicands were formed by raising negative numbers to even powers.

57.  $\sqrt{6} \sqrt{3} 3\sqrt{2}$  58.  $\sqrt{15} \sqrt{5} 5\sqrt{3}$   
 59.  $\sqrt{10} \sqrt{14} 2\sqrt{35}$  60.  $\sqrt{6} \sqrt{33} 3\sqrt{22}$   
 61.  $\sqrt[3]{9} \sqrt[3]{3} 3$  62.  $\sqrt[3]{2} \sqrt[3]{4} 2$

### SKILL REVIEW

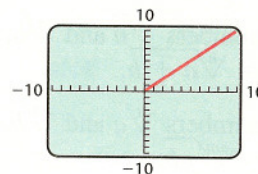
Review simplifying rational expressions (Sections 6.1–6.3).

Perform the indicated operation and, if possible, simplify.

79.  $\frac{15a^2x}{8b} \cdot \frac{24b^2x}{5a}$  [6.1]  $9abx^2$   
 80.  $\frac{x^2 - 1}{x^2 - 4} \div \frac{x^2 - x - 2}{x^2 + x - 2}$  [6.1]  $\frac{(x-1)^2}{(x-2)^2}$   
 81.  $\frac{x-3}{2x-10} - \frac{3x-5}{x^2-25}$  [6.2]  $\frac{x+1}{2(x+5)}$   
 82.  $\frac{6x}{25y^2} + \frac{3y}{10x}$  [6.2]  $\frac{3(4x^2 + 5y^3)}{50xy^2}$   
 83.  $\frac{a^{-1} + b^{-1}}{ab}$  [6.3]  $\frac{b+a}{a^2b^2}$  84.  $\frac{\frac{1}{x+1} - \frac{2}{x}}{\frac{3}{x} + \frac{1}{x+1}}$  [6.3]  $\frac{-x-2}{4x+3}$

### SYNTHESIS

85. Abdul is puzzled. When he uses a graphing calculator to graph  $y = \sqrt{x} \cdot \sqrt{x}$ , he gets the following screen. Explain why Abdul did not get the complete line  $y = x$ .





86. Is the equation  $\sqrt{(2x + 3)^8} = (2x + 3)^4$  always, sometimes, or never true? Why?

87. **Radar Range.** The function given by

$$R(x) = \frac{1}{2} \sqrt[4]{\frac{x \cdot 3.0 \times 10^6}{\pi^2}}$$

can be used to determine the maximum range  $R(x)$ , in miles, of an ARSR-3 surveillance radar with a peak power of  $x$  watts. Determine the maximum radar range when the peak power is  $5 \times 10^4$  watts. Source: Introduction to RADAR Techniques, Federal Aviation Administration, 1988 175.6 mi

88. **Speed of a Skidding Car.** Under certain conditions, police can estimate the speed at which a car was traveling by measuring its skid marks. The function given by

$$r(L) = 2\sqrt{5L}$$

can be used, where  $L$  is the length of a skid mark, in feet, and  $r(L)$  is the speed, in miles per hour. Find the exact speed and an estimate (to the nearest tenth mile per hour) for the speed of a car that left skid marks (a) 20 ft long; (b) 70 ft long; (c) 90 ft long. See also Exercise 101.



89. **Wind Chill Temperature.** When the temperature is  $T$  degrees Celsius and the wind speed is  $v$  meters per second, the *wind chill temperature*,  $T_w$ , is the temperature (with no wind) that it feels like. Here is a formula for finding wind chill temperature:

$$T_w = 33 - \frac{(10.45 + 10\sqrt{v} - v)(33 - T)}{22}$$

Estimate the wind chill temperature (to the nearest tenth of a degree) for the given actual temperatures and wind speeds.

- a)  $T = 7^\circ\text{C}$ ,  $v = 8$  m/sec  $-3.3^\circ\text{C}$   
 b)  $T = 0^\circ\text{C}$ ,  $v = 12$  m/sec  $-16.6^\circ\text{C}$   
 c)  $T = -5^\circ\text{C}$ ,  $v = 14$  m/sec  $-25.5^\circ\text{C}$   
 d)  $T = -23^\circ\text{C}$ ,  $v = 15$  m/sec  $-54.0^\circ\text{C}$

Simplify. Assume that all variables are nonnegative.

90.  $(\sqrt{r^3t})^7 \cdot r^{10}t^3\sqrt{rt}$   
 91.  $(\sqrt[3]{25x^4})^4 \cdot 25x^5\sqrt[3]{25x}$   
 92.  $(\sqrt[3]{a^2b^4})^5 \cdot a^3b^6\sqrt[3]{ab^2}$   
 93.  $(\sqrt{a^3b^5})^7 \cdot a^{10}b^{17}\sqrt{ab}$

Draw and compare the graphs of each group of functions.

94.  $f(x) = \sqrt{x^2 + 2x + 1}$ ,  
 $g(x) = x + 1$ ,  
 $h(x) = |x + 1|$

95.  $f(x) = \sqrt{x^2 - 2x + 1}$ ,  
 $g(x) = x - 1$ ,  
 $h(x) = |x - 1|$

96. If  $f(t) = \sqrt{t^2 - 3t - 4}$ , what is the domain of  $f$ ?

97. What is the domain of  $g$ , if  $g(x) = \sqrt{x^2 - 6x + 8}$ ?  
 $\{x \mid x \leq 2 \text{ or } x \geq 4\}$ , or  $(-\infty, 2] \cup [4, \infty)$

Solve.

98.  $\sqrt[3]{5x^{k+1}} \sqrt[3]{25x^k} = 5x^7$ , for  $k = 10$

99.  $\sqrt[5]{4a^{3k+2}} \sqrt[5]{8a^{6-k}} = 2a^4$ , for  $k = 6$

100. Use a graphing calculator to check your answers to Exercises 21 and 41.

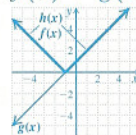
101. Does a car traveling twice as fast as another car leave a skid mark that is twice as long? (See Exercise 88.) Why or why not?

Try Exercise Answers: Section 7.3

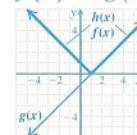
7.  $\sqrt{35}$  31.  $2x^4\sqrt{2x}$  45.  $f(x) = |x - 1|\sqrt{5}$   
 51.  $2xy^2\sqrt[4]{xy^3}$  65.  $a\sqrt[3]{10}$

88. (a) 20 mph; (b)  $10\sqrt{14} \approx 37.4$  mph; (c)  $30\sqrt{2} \approx 42.4$  mph

94.  $f(x) = h(x)$ ;  
 $f(x) \neq g(x)$



95.  $f(x) = h(x)$ ;  
 $f(x) \neq g(x)$



96.  $\{t \mid t \leq -1 \text{ or } t \geq 4\}$ , or  $(-\infty, -1] \cup [4, \infty)$